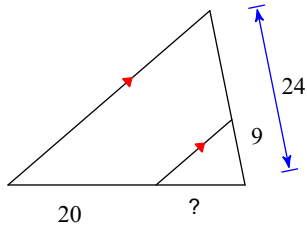


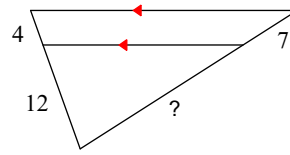
Triangle Proportionality Theorem Practice

Find the missing length indicated.

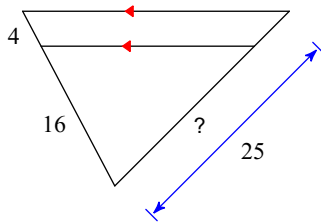
1)



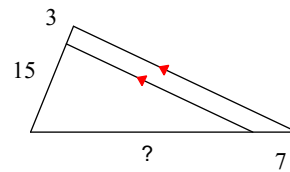
2)



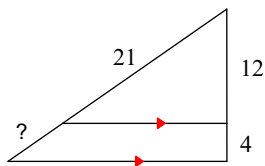
3)



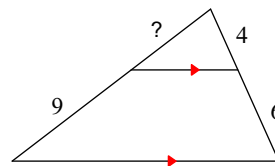
4)



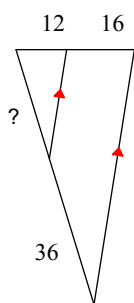
5)



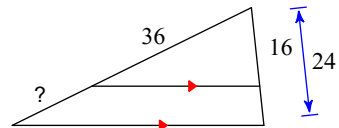
6)



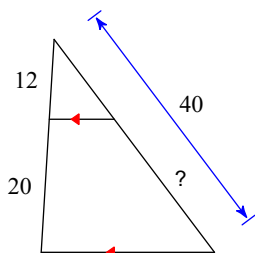
7)



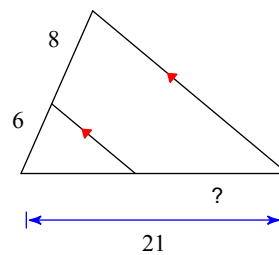
8)



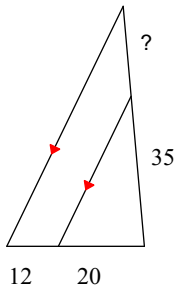
9)



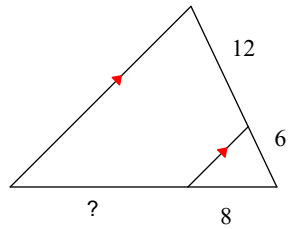
10)



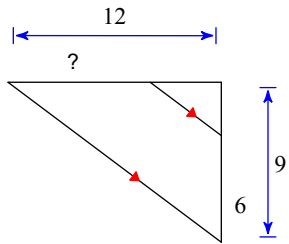
11)



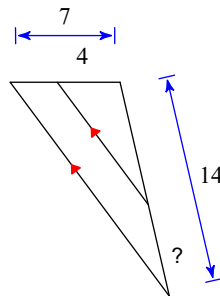
12)



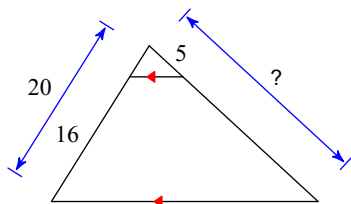
13)



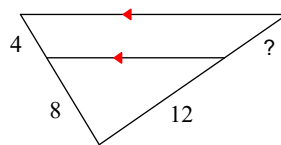
14)



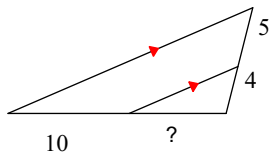
15)



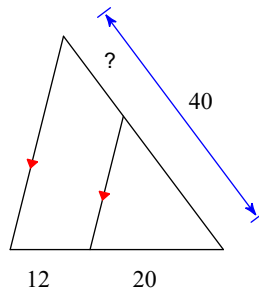
16)



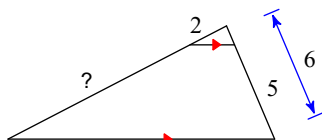
17)



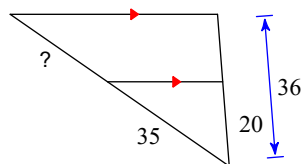
18)



19)



20)



Answers to Triangle Proportionality Theorem Practice

1) 12

5) 7

9) 25

13) 8

17) 8

2) 21

6) 6

10) 12

14) 6

18) 15

3) 20

7) 27

11) 21

15) 25

19) 10

4) 35

8) 18

12) 16

16) 6

20) 28