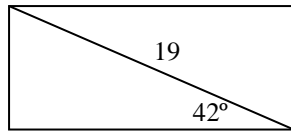
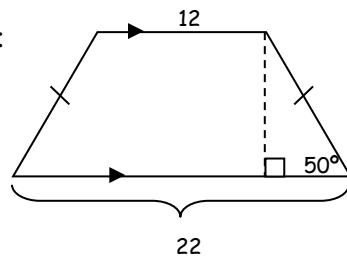


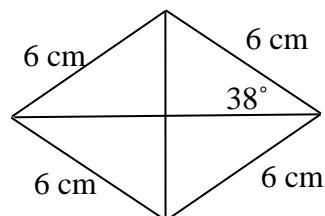
1. Find the area of the rectangle:



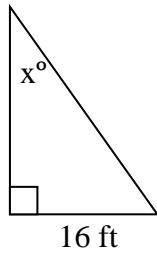
2. Find the area of the trapezoid:



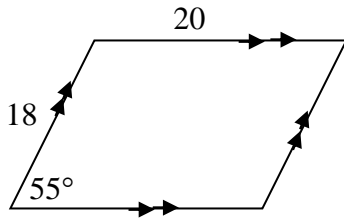
3. Find the area.



4. Given the area of the triangle is 144 square feet. Find the measure of the missing angle, x .



5. Find the area of the parallelogram.



6. Given the area of the rectangle is 220.62, find the base and height.

